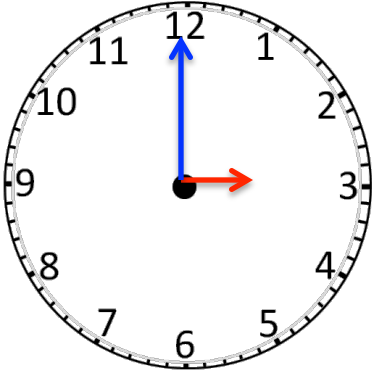


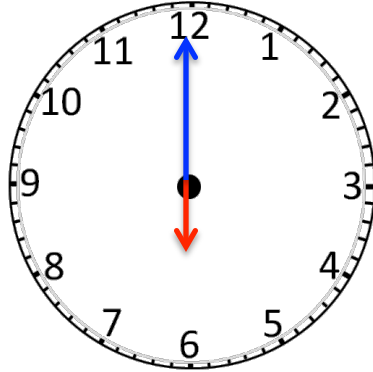
Name: _____

Date: _____

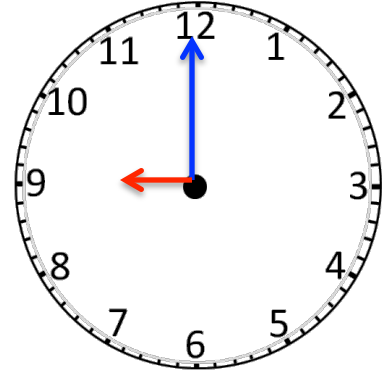
According to the analog clock, please write down the time.



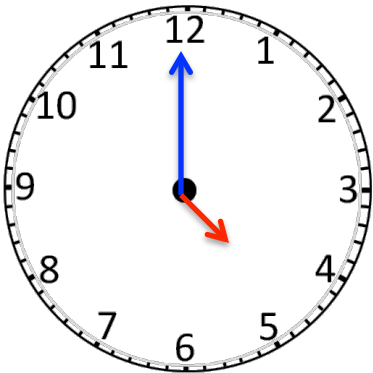
— : —



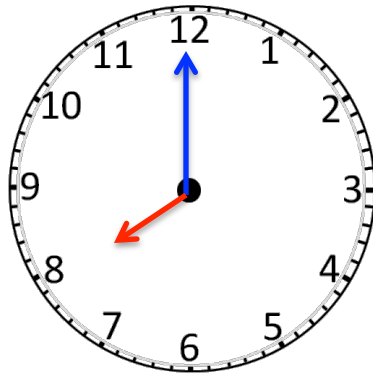
— : —



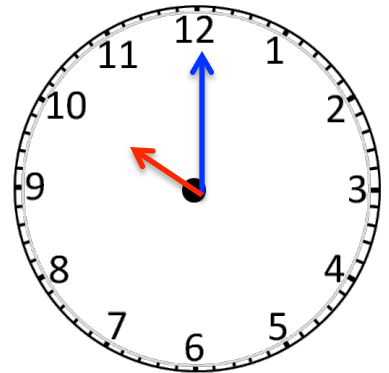
— : —



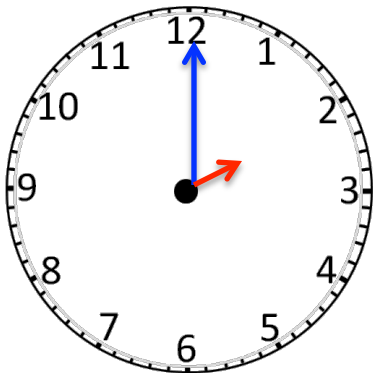
— : —



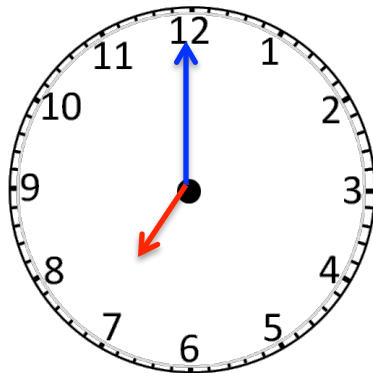
— : —



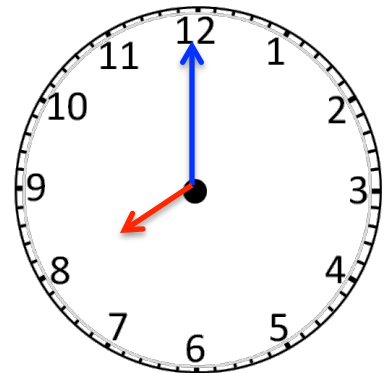
— : —



— : —



— : —



— : —

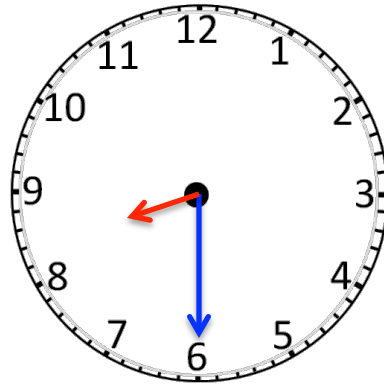
Name: _____

Date: _____

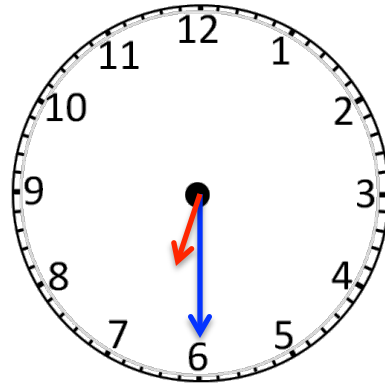
Please work out the math story problems.

Madeline looks at the clock and reads 8:30; Joyce looks at the clock and reads 9:30. Who is right? Please explain why do you think so.

I think Madeline is right. Because the short hour hand is between 8 and 9, but not 9 yet; while the long minute hand is on 6.



Jack looks at the clock and reads 6:30; Jim looks at the clock and reads 7:30. Who is right? Please explain why do you think so.



Mandy looks at the clock and reads 4:30; Sara looks at the clock and reads 3:30. Who is right? Please explain why do you think so.

