

Name: _____

Date: _____

Please fill in the lily pad with pattern you find.



10



30

40



15

20



30



40



18



22



26



16



36

46



66



Please finish the following questions.





Number	Chinese Number	Tens	Ones	Picture	Expanded Form
58	五十八	5	8		$58=50+8$
23					
18					

1	2	3	4	5	6	7	8	9	10
一	二	三	四	五	六	七	八	九	十

Name: _____

Date: _____

Please fill in the blanks with observed patterns.



Please finish the following questions

Number	Chinese Number	Tens	Ones	Picture	Expanded Form
58	五十八	5	8		$58=50+8$
16					
20					