

Name: _____


Date: _____

1. Count the candies. One couple is equal to two.


Row 1:  = _____


Row 2:  = _____


Row 3:  = _____

Row 4:  = _____

2. Count the following things and write down the numbers.







3. Please fill in the blanks with numbers.

1		3		5		7		9	
11		13		15		17		19	
21		23		25		27		29	

Name: _____

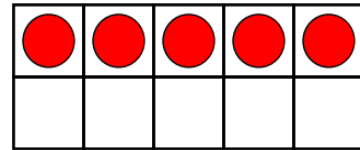
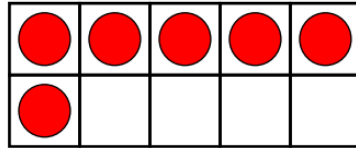
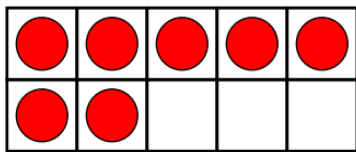
Date: _____

1. Identify the number BEFORE and AFTER.

BEFORE		AFTER

BEFORE		AFTER

2. Please count how many each ten frame show.



3. Please count how many tens and ones.

Tens	Ones	Number
		$20+1=21$