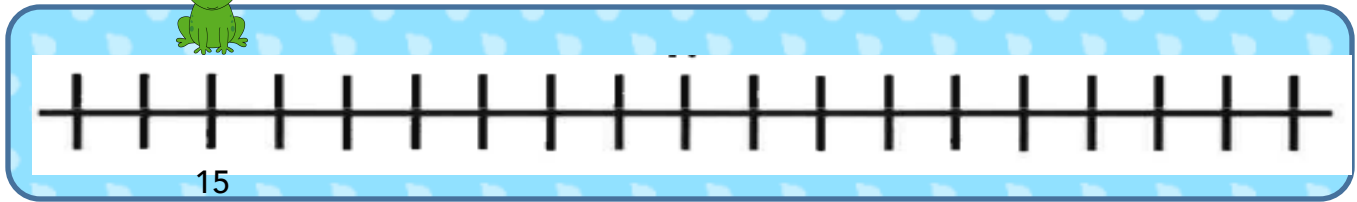



Name: _____

Date: _____

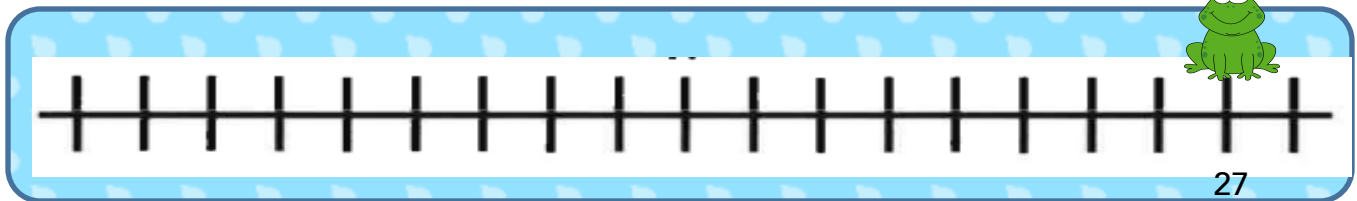
1. Start at 15. Count up 5 hops. Where will you end? _____



2. Start at 18. Count up 6 hops. Where will you end? _____



3. Start at 27. Count back 9 hops. Where will you end? _____



4. Please fill in the blanks with numbers.

1				5	6	7		9	
		13				17			20
21				25			28		
31			34			37			40
	42			45			48		

Name: _____

Date: _____

1. Please circle the number that is more.

26 19

18 29

19 10

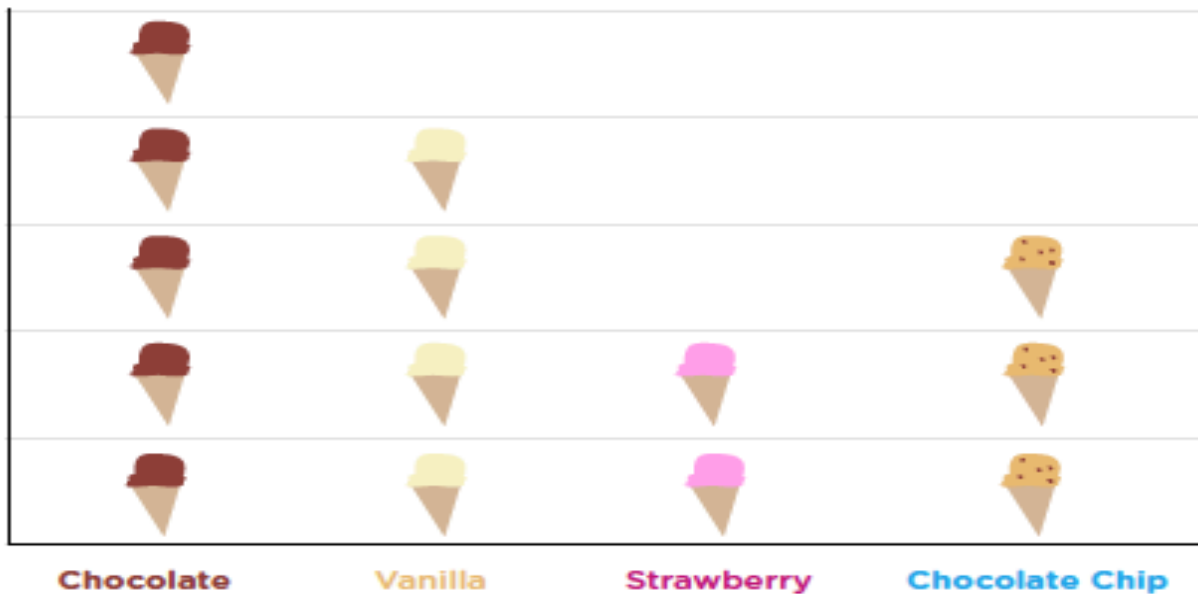
2. Please circle the number that is less.

8 12

14 32

30 29

3. Please read the graph and finish the questions.



1. How many people like **chocolate** ice cream? _____

2. How many people like **strawberry** ice cream? _____

3. How many people like **vanilla** ice cream? _____

4. How many people like **chocolate chip** ice cream? _____

5. What is the least popular ice cream? _____

5. What is the most popular ice cream? _____