



Name: _____

Date: _____

1. Please work out the following math questions.



2. Please fill in the blanks to make fact families.

___	+	5	=	10
5	+	___	=	10
10	-	5	=	___
___	-	5	=	5

4	+	1	=	___
___	+	4	=	5
___	-	4	=	1
5	-	___	=	4

___	+	2	=	3
2	+	1	=	___
3	-	___	=	2
3	-	2	=	___

5	+	2	=	___
___	+	5	=	7
___	-	5	=	2
___	-	2	=	5

3	+	___	=	4
1	+	___	=	4
___	-	3	=	1
___	-	1	=	3

5	+	5	=	___
5	+	___	=	10
10	-	___	=	5
10	-	5	=	___

2	+	___	=	5
3	+	___	=	5
5	-	___	=	3
5	-	___	=	2

3	+	___	=	4
1	+	3	=	___
4	-	3	=	___
4	-	1	=	___


5	+	___	=	8
3	+	___	=	8
8	-	___	=	3
___	-	3	=	5

Name: _____

Date: _____

1. Please workout the following math problems.

Mike has 5 candies. Kate has 4 more candies than Mike. How many candies does Kate have? Please show how you know by using a picture or a number line and a number sentence.



$$4+5=9$$

Kate has 4 more candies.

Jimmy has 2 stuffed animals. Ethan has 5 more stuffed animals than Jim. How many stuffed animals does Ethan have? Please show how you know by using a picture or a number line and a number sentence.

Joy gets 6 candies from Halloween. Angel has 4 more candies than Joy. How many candies does Angel have?? Please show how you know by using a picture or a number line and a number sentence.